


Prijemni ispit iz teorije glazbe (za instrumentaliste)

Ime i prezime:

Datum:


1. Imenuj note ili napiši notu na zadano ime. Pazi na: ključ, predznake i malo i veliko slovo.



A musical staff with a treble clef and a bass clef. The notes are: a4 (treble), f4 (bass), f#4 (treble), G4 (treble), and g#4 (treble). The labels below the staff are: as, fl, fis, G, gis.


2. Napiši zadanu ljestvicu te označi tetrakorde i polustepene.

E-dur




An empty musical staff with a treble clef, intended for writing the E-dur scale.

g-mol M
(uzlazno i silazno)



An empty musical staff with a treble clef, intended for writing the g-mol M scale.

3. Imenuj ili izgradi zadani interval prema gore. Pazi na promjenu ključa.



A musical staff with a treble clef and a bass clef. The intervals are: v6 (treble), č4 (bass), m7 (treble), pov4 (treble), m6 (bass), and m7 (bass). The labels below the staff are: v6, č4, m7, pov4, m6, m7.

